




## Lakeside EYFS and KSI Home Learning

Hi All,

We hope that you are all staying safe and happy. It's been great seeing all the wonderful work you have been doing at home!

This week's activities are based on the book 'The Bravest Fish' by Matt Buckingham. A delightful book that follows the journey of a little fish, Stanley, after he is separated from his school and fish family. The book follows Stanley's journey through the ocean to find his family. The story highlights the importance of being positive, never giving up and harnessing strength and bravery.



If you don't have a copy of the book don't worry, you can find a version on YouTube - Once upon a story (see link)

Attached are the suggested activities. Many of the activities can be adapted and done simply in a notebook, on paper or outside! Remember to go on the website for the accompanying resources.

Keep reading regularly!

Wishing you all the best.

Stay safe,

From all the Lakeside EYFS and KSI team.

Year group: 2

Lakeside Home Learning

Week beginning: 22.6.20

1) Each day please try to complete the daily essentials for English, Maths and wider-curriculum in the flags at the top of the page.

2) Then you can choose from the weekly choices below. Can you complete at least 1 from each colour?

## Daily Essentials

### English

Read a story to a grown up or sibling for 10 minutes.

### Maths

Complete the daily Year 2 Maths lesson on BBC Bitesize.

### Wider Curriculum

Complete a Jump Start Jonny routine.

## Weekly Choices

### Spellings

Please practise spelling numbers:  
one two three four five

☐

### Addition

Subtract two 2-digit numbers.  
55-24=    89-31=    67-32=

☐

### Keep Active

Learn how to skip using a skipping rope.

☐

### Handwriting

Practise forming these digraphs:  
ph nk oa oi dr

☐

### Reasoning and Problem Solving

Have a go at the problem solving activities (page 4 of this pack)

☐

### Be Helpful

Help to keep the bathroom sink clean!

☐

### Speaking and Listening

Learn three facts about fish, learn them and tell them to a family member.

☐

### Comparing Shapes

Choose two of the 3D shapes below.  
What is the same and what is different about them? triangular prism cuboid  
Cube sphere cylinder pyramid

☐

### Learn a skill

Learn how to wrap a present.

☐

When you have completed the Daily Essentials for English, Maths and wider-curriculum tick them off below

You can also tick off your weekly choices, (REMEMBER: pick a minimum of 1 a week from each colour)



Monday	Tuesday	Wednesday	Thursday	Friday
<input type="checkbox"/> <input type="checkbox"/> <input type="checkbox"/>	<input type="checkbox"/> <input type="checkbox"/> <input type="checkbox"/>	<input type="checkbox"/> <input type="checkbox"/> <input type="checkbox"/>	<input type="checkbox"/> <input type="checkbox"/> <input type="checkbox"/>	<input type="checkbox"/> <input type="checkbox"/> <input type="checkbox"/>
<input type="checkbox"/> <input type="checkbox"/> <input type="checkbox"/>	<input type="checkbox"/> <input type="checkbox"/> <input type="checkbox"/>	<input type="checkbox"/> <input type="checkbox"/> <input type="checkbox"/>	<input type="checkbox"/> <input type="checkbox"/> <input type="checkbox"/>	<input type="checkbox"/> <input type="checkbox"/> <input type="checkbox"/>



Look

Trace

ph

ph

nk

nk

oa

oa

oi

oi

dr

dr

one

one

two

two

three

three

four

four

five

five



## Word Problems


### The Fairground




*Work out the answers to these problems. Show your working out.*

1. There are 3 dodgem cars, each car holds 2 people. How many people could go on the ride?
2. 3 girls go on the teacups. It costs 10p each. How much did it cost altogether?  
How much change would they get from £1?
3. Mark & Rob went on the ghost train. It cost 20p each. How much did it cost altogether?
4. Darren bought a toffee apple for 55p. How much change did he get from £1?
5. The rollercoaster carriages hold 4 people. There are 5 carriages in total. How many people can go on the ride?
6. Suzy went on the waltzer. It costs 50p a go. How much would it cost her to go on twice?
7. Any one under 10 can pay half price for a ride on the rollercoaster. The full price is 40p. How much do under 10's pay?
8. Lucinda went to the fairground with £1. She left with 4p. How much did she spend when she was there?
9. Thomas went on the dodgems 6 times. Each time it cost 20p. How much did he spend?
10. Robert bought 2 teddy bears. They cost £1.50 each. How much did he spend on the bears?





Read/watch and discuss the story:




Link:

<https://www.youtube.com/watch?v=kZYcXDhP>

EgA

In the story the lobster was counting coins. Have a look at some coins in your house and see how much they are worth.



Draw or paint a picture of a fish. It could be your pet or a made up one!



Complete a word search on words from the story!

**The Bravest Fish**

J C V L Y V W R C L S L  
E A B R A V E M O R Y U  
L V X M L T O J N A U N  
L E U J S E T J H E O S  
Y F O B L G G J K P S C  
F L O S D N E I R F T H  
I L H R X A M B E H A O  
S G K E T R W Z L S N O  
H K R E T O A O O I L L  
X M A F X N V P O F E R  
V R H K C U E F C F Y B  
B T S D I P S E M P H T

LOBSTER BRAVE ORANGE  
PEARL FISH COOLER  
JELLYFISH WAVES  
SHARK STANLEY  
FRIENDS REEF  
CAVE SCHOOL



Ask members of your family what their favourite sea creature is and make a graph.

Ask members of your family what their favourite sea creature is. You could phone your friends too! Colour the graph to show the results.





Create your own shoe box aquarium.



Create your own under the sea coral reef picture.



Write about a pet fish you have or a pet fish you would like to have



Stanley saw his own reflection in the pearls. Can you look in a mirror and draw your own reflection?






Stanley was very brave in the story.  
Can you write a Brave Acrostic poem.

#### Find Your Brave Acrostic Poem

Write a poem all about what it means to be brave. Try to show how being brave can help us all feel good on the inside.

F	_____
I	_____
N	_____
D	_____
Y	_____
O	_____
U	_____
R	_____
B	_____
R	_____
A	_____
V	_____
E	_____

Can you weave your own colourful fish.



Maybe do a few small ones to create a picture!

Help your grown up to make fish fingers for dinner. What yummy things can you have with it?



Use these ingredients to create your own yummy clams.

Round crackers, Peanut butter, cream cheese, hummus, or cheese spread, Yogurt-covered raisins (white) for the pearl, Raisins.



For method see recipe!

Stanley felt alone and wanted to find his friends in the story. Can you write a letter to a friend to cheer them up?



Have a go at the money challenge sheets. There are 3 to choose from. Can you work out the change?

How much are these coins worth?



Draw some coins you could use to make 10p

You have 10p, how much change would you get?



How many could you buy with 10p?